

**Class** : I (Oral testing)






**Subject** : Mathematics

**LO** : L4– Counts objects using numbers 1 to 9

**Key** : 7

---

**How many cats have a tail?**



**Class** : II (Oral testing)

**Subject** : Language

**LO** : L11– Uses prepositions like 'before', 'between' etc.

**Key** : b)

---

**INSTRUCTION:**

- The teacher shows a picture and asks where the child is in the picture.

**Q1. Look at the picture and say where the child is.**



Reema is standing \_\_\_\_\_ a chair.

a) before

b) behind

**Class** : III**Subject** : Reading Comprehension**LO** : L2– Responds to textual and other material, in oral/written forms, in English/  
Braille/sign**Key** : 3

---

**Read the following passage and encircle the answers of the questions.**

You must have seen butterflies. Do you know where a butterfly comes from?

The mother butterfly lays an egg on a leaf or plant. A small caterpillar comes out of the egg.

The caterpillar eats leaves and grows bigger. Then the caterpillar attaches itself to a leaf and makes a large cocoon. This is a kind of shell that protects it from other animals. Inside the cocoon it grows wings and legs.

Finally, the cocoon opens and the new beautiful butterfly comes out. It slowly opens its wings and then it flies away.

**Cocoon is a kind of**

1. plant.
2. shell.
3. butterfly.

Class : III

Subject : Mathematics

**LO** : L1C– Solve simple real life situations/problems including money, length, mass and capacity using the four operations.

Key : 2

**Your mother gave you Rs. 50. She gave the money in three notes. Which of the following shows the notes she gave?**

1



2




3



**Class** : V**Subject** : Reading Comprehension**LO** : L4– Reads independently in English storybooks, news items/headlines, advertisements etc.**Key** : 4

**In which state the cricket club is located?**

# Cricket Club



**Students of all classes are welcome.**  
**Come, let us learn cricket!**  
Every Sunday in the Playground

	Time
Girls	9:00 – 10:00 in the morning
Boys	10:30 – 12:00 in the morning

**Sadanand Primary School  
Mahatma Gandhi Road  
Rampur, Uttar Pradesh**

1. Sadanand
2. Mahatma Gandhi
3. Rampur
4. Uttar Pradesh

**Class** : V**Subject** : Mathematics**LO** : L1– Reads and writes numbers bigger than 1000 being used in her/his surroundings.**Key** : 3

---

**Renu has the following four number cards:**

**7****5****8****6**

**Which is the largest 4-digit number she can make using all cards?**

1. 5786
2. 8576
3. 8765
4. 9999

Class : VIII

Subject : Reading Comprehension

LO : L1– Responds to an advertisement (Grasp ideas)

Key : 3

Read the following advertisement and answer the questions that follow:

# Yellow Peas Dal

A Nutritious and Healthy diet at a reasonable cost



## Benefits of Yellow Peas Dal

It's an excellent source of :

- **Proteins** • **Carbohydrates**
- **Fibre... and other benefits**

(as per the study conducted by  
Central Food Technology Research Institute, Mysore  
- Report can be accessed at [www.fcamin.nic.in](http://www.fcamin.nic.in))

Available in Delhi at outlets of

 Kendriya Bhandar &  NCCF NCCF Counters

 NAFED\* &  Mother Dairy Booths\*

\* To be available shortly

Consumers ! For online complaint filing log on to : [www.core.nic.in](http://www.core.nic.in) or call at toll free No. 18001804566

Consumers ! For any help/clarification, feel free to call  
**National Consumer Help Line No. 18000114000**  
(Toll free : Monday - Saturday 9.30 a.m. to 5.30 p.m.)  
011-27652955, 56, 57, 58 (Normal Call Charges Apply)



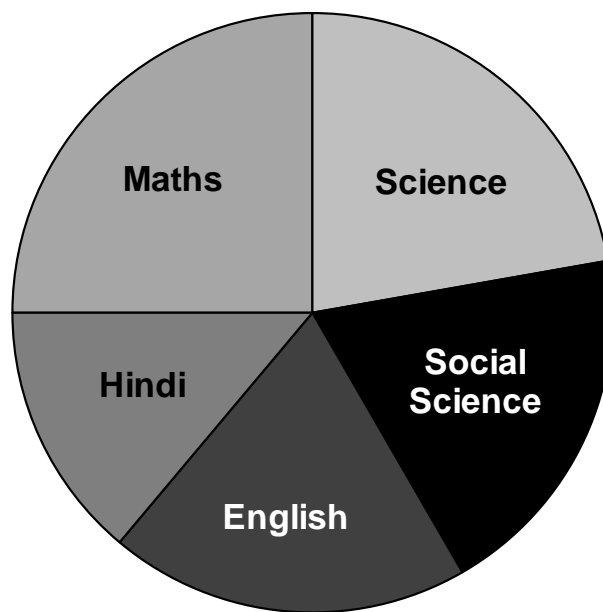
Issued in Public Interest by:  
Government of India  
Ministry of Consumer Affairs, Food and Public Distribution  
Department of Consumer Affairs,  
Krishi Bhawan, New Delhi-110001

Yellow peas dal should be consumed because it is

1. easily available.
2. advocated by the government.
3. healthy and nutritious.
4. yellow in colour.

**Class : VIII****Subject : Mathematics****LO : L11– Interprets the pie chart****Key : 2**

**The following pie chart represents marks in percent scored by a student in five subjects. In which subject the student gets minimum marks?**



1. English
2. Hindi
3. Maths
4. Science